



# CENTURION DEFENCE ACADEMY

उत्तर भारत का नं. 1 डिफेन्स कोचिंग संस्थान

### Candidate Detail

Name : \_\_\_\_\_ Father Name : \_\_\_\_\_  
 Mob. No. : \_\_\_\_\_ E-mail Id. : \_\_\_\_\_  
 Add. : \_\_\_\_\_

### Psychologist Test

#### TAT

Time 4 minutes

The first test will be TAT, here you will be shown a picture for about 30 seconds, and you will have to write a story "4" minutes keeping the picture in mind. Your story should consist of three parts in which the 1<sup>st</sup> part should convey, how the situation has developed and then arrived at the present stage, then what is happening now and what is the final outcome. Do not get worried about beauty of expression and spelling. If there is any word or expression, which is not coming to your mind in English you can write it in Hindi."

#### STORY



#### W.A.T.

Time 2.5 minutes

We will show you 60 words and you have to write a sentence within 15 seconds. It is not necessary that the word should come in the sentence. After every 20 words, we will show you a blank that will be the time to change the page

- |                 |                      |
|-----------------|----------------------|
| 1. LOVE .....   | 6. BAD .....         |
| 2. KILL .....   | 7. COMMANDER .....   |
| 3. GIRL .....   | 8. MACHINE GUN ..... |
| 4. DEFEAT ..... | 9. FATHER .....      |
| 5. ARMY .....   | 10. GUN .....        |

The S.R.T. in which your reaction is tested in a particular set of circumstances and will have to write as briefly as you can. How you adjust yourself in any situation, you are aggressive or defensive or defensive, do you loose your temper or not, how do you solve the problems in a critical situation's and how do you tackle your problems in any situation and you have to take quick decision.

#### S.R.T. Series

Time 5 minutes

You will be given a set of 60 normal situations, commonly encountered by every one, You just have to give your natural reactions to the situations. Here I am giving 10 situations and time will be 5 minutes.

1. He was appointed captain of basketball team but other players revolted against his appointment. He.....
2. He is passing through a jungle & he watches a man cutting a tree, He .....
3. He receives a telegram that his beloved wife is dying but he, an army officer, is deployed on the border. He .....
4. He is quite fed up of the corruption prevailing in the society. He.....
5. His class mater generally do not listen to him. He.....
6. He likes mangoes but the only ones available are on the trees of neighbor who is not on talking terms. He.....

Give a Miss Call on: 9205516300, MOB : 9795977779, 9795977776 LUCKNOW – INDIRA NAGAR, ALAMBAGH  
 'Come to Learn ... Go to Serve ...!'

**LUCKNOW : INDIRA NAGAR, ALAMBAGH**


7. He wants to marry Rita but she belongs to another caste & his parents are totally against inter-cast marriage. He .....
8. He is unable to understand mathematics as taught by his teacher. He.....
9. He is watching a movie in the cinema hall when suddenly he finds a snake near his feet. He.....
10. He has to go to see his ailing sister who lives 10 kms. Away. It is cold rainy night & no conveyance is available. He.....

**OIR Series**

**Time 7 minutes**


1. Select a figure from amongst the Answer Figures which will continue the same series as established by the five Problem Figures.

Problem Figures:



(A) (B) (C) (D) (E)

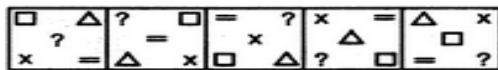
Answer Figures



(1) (2) (3) (4) (5)

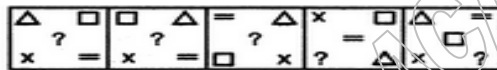
2. Select a figure from amongst the Answer Figures which will continue the same series as established by the five Problem Figures.

Problem Figures:



(A) (B) (C) (D) (E)

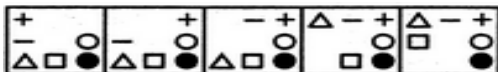
Answer Figures:



(1) (2) (3) (4) (5)

3. Select a figure from amongst the Answer Figures which will continue the same series as established by the five Problem Figures.

Problem Figures:



(A) (B) (C) (D) (E)

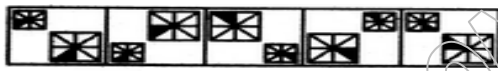
Answer Figure



(1) (2) (3) (4) (5)

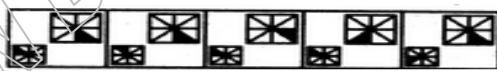
4. Select a figure from amongst the Answer Figures which will continue the same series as established by the five Problem Figures.

Problem Figures:



(A) (B) (C) (D) (E)

Answer Figures:



(1) (2) (3) (4) (5)


5. Select a figure from amongst the Answer Figures which will continue the same series as established by the five Problem Figures.

Problem Figures:



(A) (B) (C) (D) (E)

Answer Figures:



(1) (2) (3) (4) (5)

6. If the following series is written in the reverse order and the alternate letter are deleted from it then which letter will divide the new series in two equal parts?

ABCDEFHGHIJKLMNOPQRSTUVWXYZ.

(A) N (B) P (C) L (D) M (E) None of these

7. If the second half of the series is written in the reverse order then which will be the 9th letter to the right of 7th letter from your left ?

ABCDEFGHIJKLMNOPQRSTUVWXYZ.

(A) Y (B) Z (C) P (D) X (E) None of these

8. As 'Wheel' is related to 'Vehicle' similarly 'Clock' is related to what?

(A) Needle (B) Nail (C) Stick (D) Pin (E) None of these

9. How many 3's are there in the following number series, which are preceded by an odd number but not followed by an even number?

3425315213673182785391345235435

(A) One (B) Two (C) Three (D) Four (E) More than four

10. If SPANK is coded as PSNAK then how will THROW be coded?

(A) HTORW (B) HTWOR (C) HTWRO (D) HTRWO (E) None of these

Give a Miss Call on: 9205516300, MOB : 9795977779, 9795977776 LUCKNOW – INDIRA NAGAR, ALAMBAGH  
 'Come to Learn ... Go to Serve ...!'

**LUCKNOW : INDIRA NAGAR, ALAMBAGH**