

‘Come to Learn ...

Go to Serve ...!’



Target 2021 ONLINE COURSE



E-NOTES



LIVE VIDEO



ONLINE TEST

**NDA | CDS | AFCAT | SSB
AIRFORCE X,Y,X-Y
INET | SAINIK SCHOOL**

ADMISSION OPEN

For Assistance, Call

9795977779



**Download
our app from**



**Login As Guest user
& Get Demo**



**Pay Online
Avail Online Classes**

- Daily live Classes
- Daily PDF Class notes
- Daily online quizzes
- Interview Sessions by Experts
- Assignments

- Doubt Clearing Option
- NDA E-Books
- Live Chat with Teachers
- Weekly Mock Test On Saturday
- All India Rank On Sunday



9795977779



www.centuriondefenceacademy.com

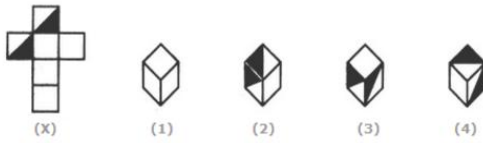
New Series - 1

1. Introducing Priyanka, Saroj says that her mother is the only daughter of my mother. How is Saroj related to Priyanka ?
(a) Mother (b) Sister
(c) Daughter (d) Aunt
(e) None of these
2. Pointing to a picture of a child Narendra says, "The brother of this child's mother, is the only son of my mother's father." How is Narendra related to the mother of the child?
(a) Daughter (b) Sister
(c) Maternal grand mother (d) Aunt
(e) None of these
3. Pointing to a lady in the photograph Kaushal said, "She is the daughter of the daughter of the only son of my grandfather." How is the lady related to Kaushal ?
(a) Sister (b) Maternal aunt
(c) Niece (d) Cousin
(e) None of these
4. Pointing to Manju, Gaurav said, "She is the wife of the only son of my father's father." How is Manju related to Gaurav ?
(a) Mother (b) Sister
(c) Aunt (d) Sister-in-law
(e) None of these
5. A lady pointing to a man in photograph says, "The father of his brother is the only son of my maternal grand father." How is the man related to that lady?
(a) Husband (b) Son
(c) Father (d) Maternal uncle
(e) None of these
6. Madhu said, pointing to Shreya, " His mother is my mother's only daughter". How Madhu is related to Shreya?
(a) Father (b) Son
(c) Grandson (d) Mother
(e) None of these
7. Pointing to a man in a photograph, a man said to a woman, "His mother is the only daughter of your father". How is the woman related to the man in the photograph?
(a) Sister (b) Mother
(c) Wife (d) Daughter
(e) None of these
8. In the certain code, is 'LOUD' is written as 'JQSF' then which of the following English word will be coded as 'PKQG'?
(a) RISE (b) ROPE
(c) ROAD (d) RICE
9. In a certain code, 'SPIDER' is written as 'PSDIRE', how will be 'COMMON' written in that code?
(a) OCOMMO (b) OCMMNO
(c) OCMOMN (d) OCMMON
10. If 'BOMBAY' is written as 'MYMYMY', how will 'TAMILNADU' be written in that code?
(a) TIATITATIA (b) MNUMNUMNU
(c) IATITATAT (d) ALDALDALD
11. In a certain code, 'DECEMBER' is written as 'ERMBCEDE', which word will be written as 'ERMBVENO in that code?
(a) BERNOVEM (b) NOVEMBER
(c) EMBERNOV (d) NOVBEREM
12. If KEDGY is coded as EKDYG then how will LIGHT be coded ?
(a) ILHTG (b) ILGHT
(c) ILGTH (d) THGIL
(e) None of these
13. If RAVE is coded as SXWB then how will SCAW be coded ?
(a) TDBO (b) TZBK
(c) PZXX (d) TVXX
(e) None of these
14. If SPANK is coded as PSNAK then how will THROW be coded?
(a) HTORW (b) HTWOR
(c) HTWRO (d) HTRWO
(e) None of these
15. If UDOMETER is coded as DUMOTERE then how will SUBLEASE be coded?
(a) USLBESAE (b) USLBAEES
(c) USBAELES (d) USLBEAES
(e) None of these
16. If PURSER is coded as UPSRRE then how will PERIODIC be coded?
(a) EPRIDOIC (b) PEIRDOCI
(c) EPIRDOCI (d) EPIRODCI
(e) None of these
17. If STRAY is coded as TUSBZ then how will MOURN be coded?
(a) LPVSO (b) NPVSO
(c) NVPSO (d) NPSVO
(e) None of these
18. If MAGIC is coded as PXJFF then how will LEASH be coded?
(a) PBDVD (b) OBDVL
(c) OHEOK (d) OBDPK
(e) None of these
19. If DOWN is coded as FQYP then how will WITH be coded?
(a) KYN (b) JYK
(c) YKVJ (d) JKVY
(e) None of these
20. If BINARY is coded as DHPZTK then how will KIDNAP be coded?
(a) MKFPCQ (b) MHFPZQ
(c) IKFMYO (d) MHFMCQ
(e) None of these
21. If RASCAL is coded as QZRBZK then how will SOLDER be coded?
(a) RNMEDQ (b) RPKEDS
(c) TPMEFS (d) RNKCDQ
(e) None of these

Directions: (Ques. 22 – 25) The sheet of paper shown in the figure (X) given on the left hand side, in each problem, is folded to form a box. Choose from

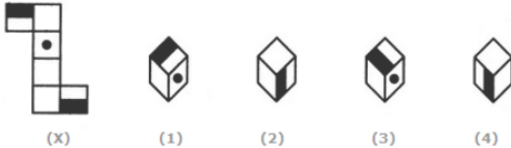
amongst the alternatives (1), (2), (3) and (4), the boxes that are similar to the box that will be formed.

22. Choose the box that is similar to the box formed from the given sheet of paper (X).



- (a) 1 and 4 only (b) 3 and 4 only
(c) 1 and 2 only (d) 2 and 3 only

23. Choose the box that is similar to the box formed from the given sheet of paper (X).



- (a) 1 and 2 only (b) 2 and 3 only
(c) 2 and 4 only (d) 1, 2, 3 and 4

24. Choose the box that is similar to the box formed from the given sheet of paper (X).



- (a) 1 only (b) 1 and 3 only
(c) 1, 3 and 4 only (d) 1, 2, 3 and 4

25. Choose the box that is similar to the box formed from the given sheet of paper (X).



- (a) 1 only (b) 2 only
(c) 3 only (d) 4 only

26. If the words are organised in reverse order of what they appear in dictionary, which word will come in the third place?

- (a) Occulist (b) Ordeum
(c) Odium (d) Odious

27. Arrange the following words as per order in the dictionary:

1. Hale 2. Hake
3. Halt 4. Hamlet

5. Ham
(a) 2, 1, 3, 5, 4 (b) 2, 1, 4, 3, 5
(c) 2, 3, 5, 4, 1 (d) 1, 3, 5, 2, 4

28. Arrange the following words as per order in the dictionary:

1. Recollect 2. Remember
3. Report 4. Repeat

5. Repeal
(a) 1, 3, 2, 4, 5 (b) 5, 3, 4, 2, 1
(c) 1, 2, 5, 4, 3 (d) 3, 2, 1, 4, 5

29. Arrange the following words as per order in the dictionary:

1. Command 2. Commit

3. Connect

4. Conceive

5. Conduct

6. Commerce

(a) 6, 2, 1, 5, 4, 3

(b) 6, 1, 2, 4, 5, 3

(c) 1, 6, 2, 4, 5, 3

(d) 1, 2, 6, 5, 3, 4

30. Which word will come in the first if all of them are arranged alphabetically as in a dictionary?

1. Grind

2. Growth

3. Great

4. Grease

5. Greet

(a) Grind

(b) Growth

(c) Great

(d) Grease

(e) Greet

31. Ramesh starting from a fixed point goes 15 km towards North and then after turning to his right he goes 15 km. Then he goes 10, 15 and 15 metres after turning to his left each time. How far is he from his starting point?

(a) 5 metres

(b) 10 metres

(c) 20 metres

(d) 15 metres

(e) Can not be determined

32. Sonalika goes 12 km towards North from a fixed point and then she goes 8 km towards South from there. In the end she goes 3 km towards east. How far and in what direction is she from her starting point?

(a) 7 km East

(b) 5 km West

(c) 7 km West

(d) 5 km North-East

(e) None of these

33. Sunita goes 30 km towards North from a fixed point, then after turning to her right she goes 15 km. After this she goes 30 km after turning to her right. How far and in what direction is she from her starting point?

(a) 45 km, East

(b) 15 km, East

(c) 45 km, West

(d) 45 Km, North

(e) None of these

- Direction: (Ques. 34 – 38)** In each of the following questions a number series is given with one term missing. Choose the correct alternative that will continue the same pattern and fill in the blank spaces.

34. 17, 22, 27, 32, ?

(a) 33

(b) 35

(c) 38

(d) 37

35. 87, 74, 61, 48, ?

(a) 35

(b) 30

(c) 32

(d) 25

36. 135, 106, 77, ?, 19

(a) 40

(c) 48

(b) 45

(d) 35

37. 25, 75, 35, 70, 45, ?

(a) 65

(c) 55

(b) 60

(d) 85

38. 82, 25, 74, 40, 60, ?

(a) 65

(b) 55

(c) 60

(d) 75

39. Pick the odd one out

(a) 3

(b) 7

(c) 9

(d) 11

40. Pick the odd one out

(a) Lion

(b) Tiger

- (c) Hen (d) Cow
41. Pick the odd one out
(a) Owl (b) Parrot
(c) Eagle (d) Hawk.

42. Pick the odd one out
(a) English (b) Hindi
(c) Urdu (d) Sanskrit

Directions: (Ques. 43 – 47) In each of the following questions a series is given. Which one of the alternatives will replace the question-mark (?)?

43. JD, KF, ?, PM, TR
(a) MI (b) NJ
(c) NI (d) OJ
(e) None of these
44. BTO, DSQ, FRS, HQU, ?
(a) IPX (b) JPW
(c) GPW (d) JRW
(e) None of these

45. B, D, G, K, P, ?
(a) U (b) W
(c) T (d) X
(e) None of these

46. Z, T, O, K, H, ?
(a) E (b) J
(c) F (d) D
(e) None of these

47. HZF, IWH, KSJ, NNL, ?
(a) SHM (b) RHN
(c) THN (d) RGM
(e) None of these

48. Ram is shorter than Sham and taller than Prem. Prem is taller than Rahul. Who is the tallest?

- (a) Ram (b) Sham
(c) Prem (d) Rahul

49. Which one of the four choices makes the best comparison?

PEACH is to HCAEP as 46251 is to:

- (a) 26451 (b) 62451
(c) 51462 (d) 15264

50. If:

1- 2, 3 = 10 2- 7, 2 = 63

3- 6, 5 = 66 4- 8, 4 = 96

Then 9, 7 =.....

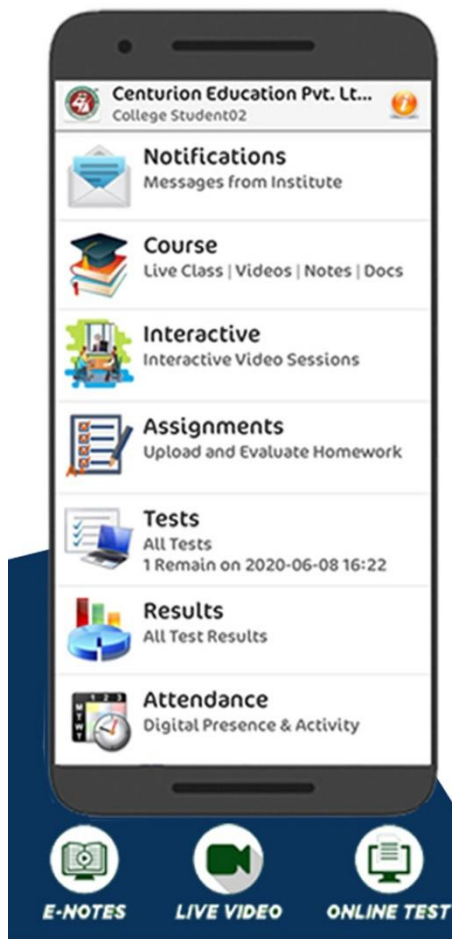
- (a) 106 (b) 146
(c) 144 (d) 156

Answer:

1.	A	11.	B	21.	D	31.	B	41.	A
2.	E	12.	C	22.	A	32.	D	42.	C
3.	C	13.	B	23.	D	33.	B	43.	A
4.	A	14.	A	24.	C	34.	D	44.	B
5.	E	15.	B	25.	B	35.	A	45.	E
6.	D	16.	C	26.	C	36.	C	46.	C
7.	B	17.	B	27.	A	37.	A	47.	B
8.	A	18.	D	28.	D	38.	B	48.	B
9.	B	19.	C	29.	C	39.	C	49.	D
10.	B	20.	D	30.	D	40.	C	50.	C



Target 20% ONLINE COURSES



**NDA | CDS | AFCAT | SS
AIRFORCE X,Y,X-Y
INET | SAINIK SCHOOL**

ADMISSION OPEN

For Assistance, Call

9795977779



**Download
our app from**



**Login As Guest user
& Get Demo**



**Pay Online
Avail Online Classes**

- Daily live Classes
- Daily PDF Class notes
- Daily online quizzes
- Interview Sessions by Experts
- Assignments
- Doubt Clearing Option
- NDA E-Books
- Live Chat with Teachers
- Weekly Mock Test On Saturday
- All India Rank On Sunday



9795977779



www.centuriondefenceacademy.com